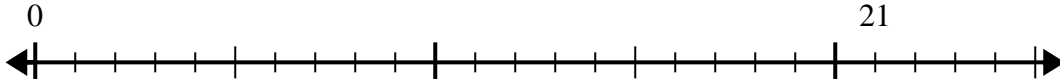


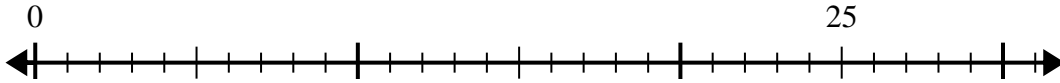


Use the number line to solve the division problem.

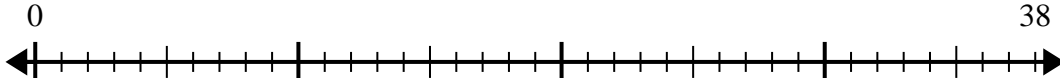
1)  $21 \div 5 =$   
0



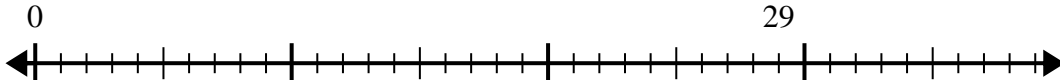
2)  $25 \div 6 =$   
0



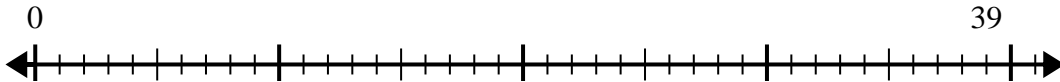
3)  $38 \div 8 =$   
0



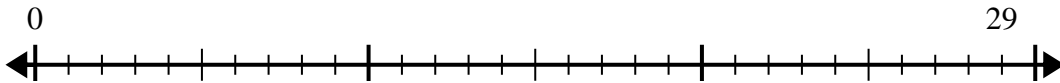
4)  $29 \div 7 =$   
0



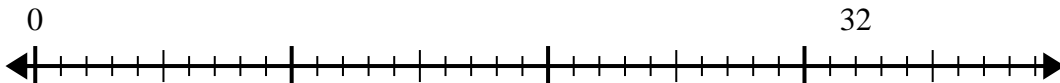
5)  $39 \div 5 =$   
0



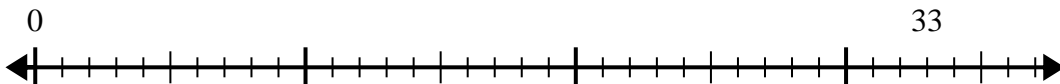
6)  $29 \div 4 =$   
0



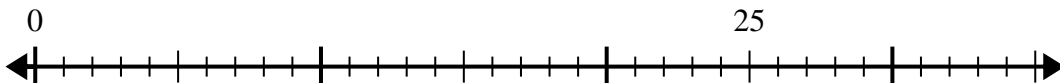
7)  $32 \div 6 =$   
0



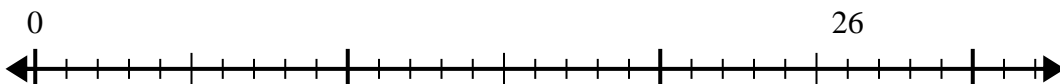
8)  $33 \div 4 =$   
0



9)  $25 \div 4 =$   
0



10)  $26 \div 7 =$   
0



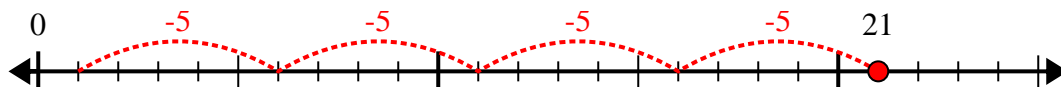
Answers

- 1. \_\_\_\_\_
- 2. \_\_\_\_\_
- 3. \_\_\_\_\_
- 4. \_\_\_\_\_
- 5. \_\_\_\_\_
- 6. \_\_\_\_\_
- 7. \_\_\_\_\_
- 8. \_\_\_\_\_
- 9. \_\_\_\_\_
- 10. \_\_\_\_\_

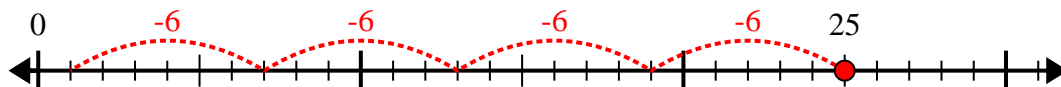


Use the number line to solve the division problem.

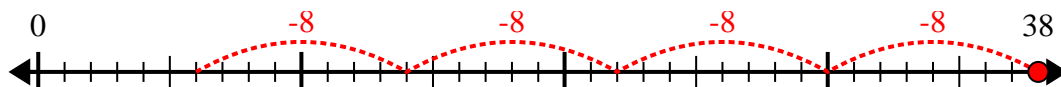
1)  $21 \div 5 =$



2)  $25 \div 6 =$



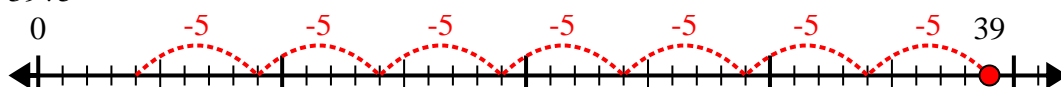
3)  $38 \div 8 =$



4)  $29 \div 7 =$



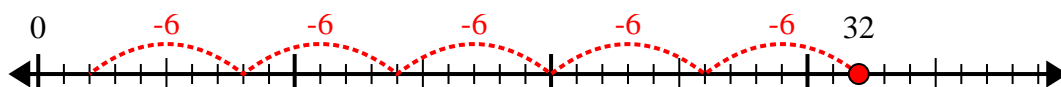
5)  $39 \div 5 =$



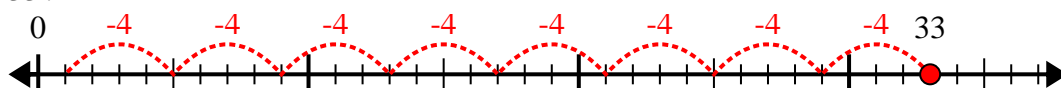
6)  $29 \div 4 =$



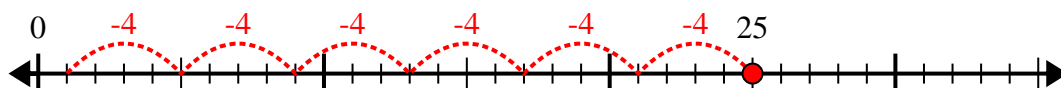
7)  $32 \div 6 =$



8)  $33 \div 4 =$



9)  $25 \div 4 =$



10)  $26 \div 7 =$



Answers

1. 4r1

2. 4r1

3. 4r6

4. 4r1

5. 7r4

6. 7r1

7. 5r2

8. 8r1

9. 6r1

10. 3r5